


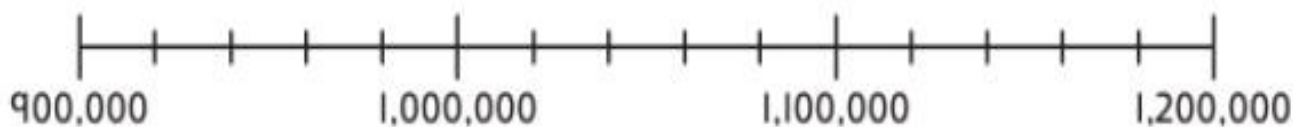
1 a) Place each distance shown on the map on this number line.



1 The approximate population of four cities is shown here.



Where will each number be positioned on this number line?



I wonder what intervals the number line is going up in.

Do you think that the next interval after 900,000 is 900,001?



2 The populations of the cities in question 1 are compared. Complete the statements to make them true.

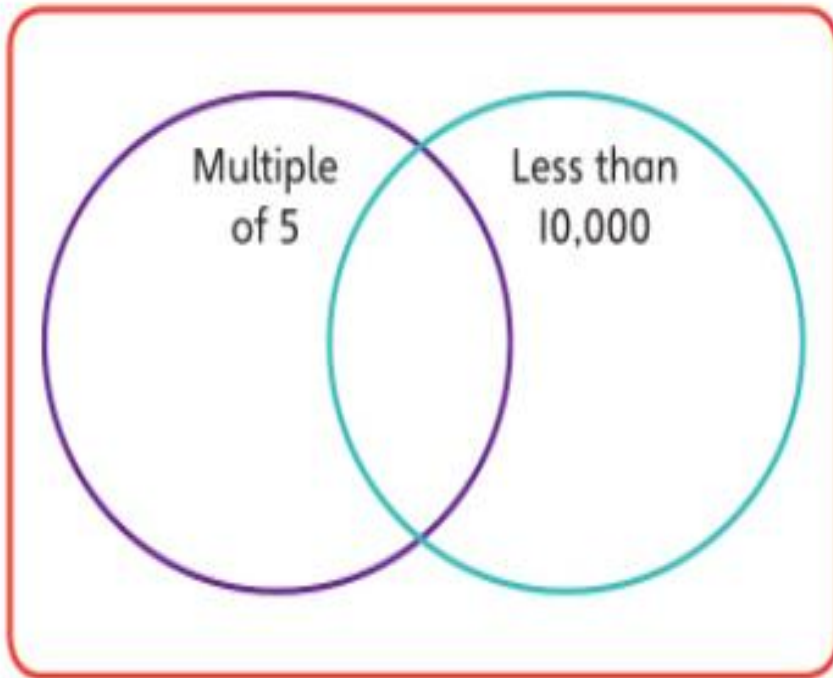
a) $942,000 > \square$

b) $924,500 < \square < 1,025,000$

You can use the number line from question 1 to help you.



3 Put each number in the correct place in the sorting circles.



6,551

4,000

12,750

500

10,001

20,615